

SSPAD | Sample Paper 1


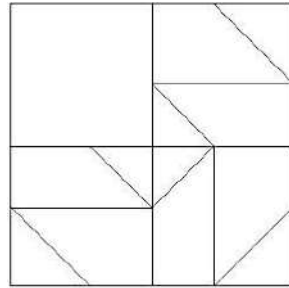
1. _____ is the movement or natural eye flow caused by the regular reoccurrence of the related element.
 - a) Rhythm*
 - b) Shape
 - c) Unity
 - d) Perspective

2. The relationship of size between objects and the space the object occupies is_____.
 - a) Balance
 - b) Perspective
 - c) Proportion*
 - d) Space

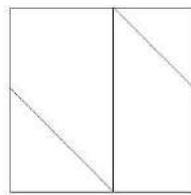
3. _____ is the range of visible wavelengths from red through the spectrum to violet, perceivable by the eye and the brain.
 - a) Distance
 - b) Perspective
 - c) Color*
 - d) Size

4. Brightness or dullness of a Hue is called as_____.
 - a) Intensity*
 - b) Tints
 - c) Shades
 - d) Density


5. Select a suitable figure from the following options that will fit in the picture below?



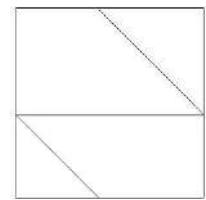
a)*



b)



c)



d)


6. The visible and tactile surface of a substance or material is known as_____.

- a) Texture*
- b) Smooth
- c) Rough
- d) Spiky

7. The equilibrium of the elements of design is_____.

- a) Action
- b) Color
- c) Balance*
- d) Distance


8. Select a suitable figure from the following options that will fit in the picture below?




a)



b)



c)



d)*


9. _____governs the eye movement in design.

- a) Body
- b) Eyelids
- c) Flow
- d) Rhythm*

10. Texture involves three senses_____.

- a) Smell, Touch, Taste
- b) Touch, Sight, Sound*
- c) Sound, Smell, Taste
- d) Sight, Smell, Sound

11. How many animals are there in the picture below?



- a) 6* b) 4 c) 8 d) 7

12. A _____ is a simple designed figure, which is usually representative of a particular period of design, style or culture.

- a) Design
- b) Shape
- c) Motif*
- d) Texture

13. Find the mirror image of the picture given below.





a)



b)*



c)



d)

14. When objects look similar to one another, people often perceive them as?

- a) Balanced
- b) Harmony
- c) Group or Pattern*
- d) Closure

15. Simplicity and logical sequence promotes_____.

- a) Awareness
- b) Cleanliness
- c) Neatness
- d) Clarity*

16. Emphasis given to an element of design adds_____to the element.

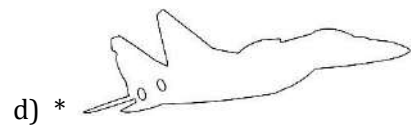

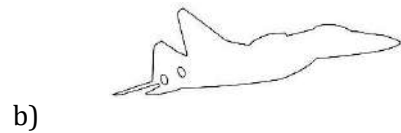

- a) Grace
- b) Greatness
- c) Dominance*
- d) Border

17. We have a glimpse of four sides of the roof. How many sides are there in real?




- a) 4
- b) 6
- c) 7
- d) 8*

18. Find the correct contour line for the image given below from the options given.



19. How many triangles are there in the picture?



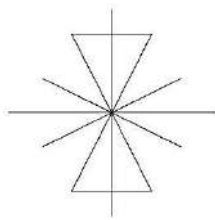
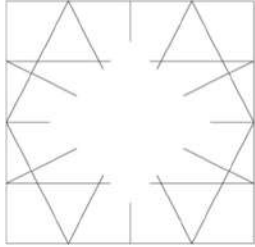
- a)3
- b) 5*
- c)4
- d)6

20. In the visual given below on the far right the figure becomes a Focal Point because it is _____ to the other.

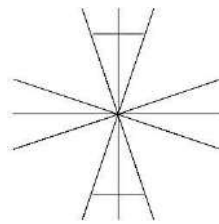


- a) Dissimilar*
- b) Closure
- c) Rhythm
- d) Asymmetrical balance

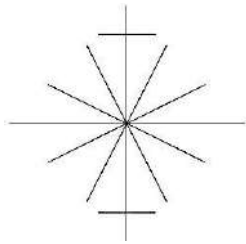
21. Select the suitable figure from the following options that will fit in the below given picture?



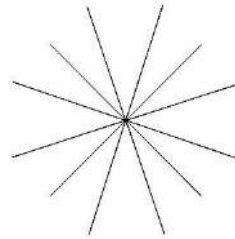
a)



b)



c) *



d)

22. What does the two 'O's depict?

L O O K

- a) Nose
- b) Ears
- c) Eyes*
- d) Bicycle

23. How many birds are there in the picture?



- a) 12 b) 13 c) 11* d) 10

24. Select the most suitable Typeface for printing "Happy Birthday" on a greeting card for age group 8 – 12 years.

a. *A b c d e f g h i j k l m n*

c. *A b c d e f g h i j k l m n*

b. *A b c d e f g h i j k l m n*

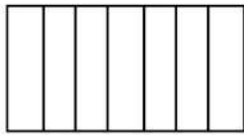
d. *A B C D E F G H I J K L M N*

- a. (*) b. c. d.

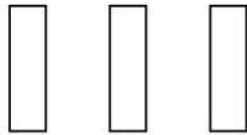
25. What is the image seen if a person views the 3-Dimensional letter "W" from top view?



Letter "W" in 3 dimensional form.




a



b



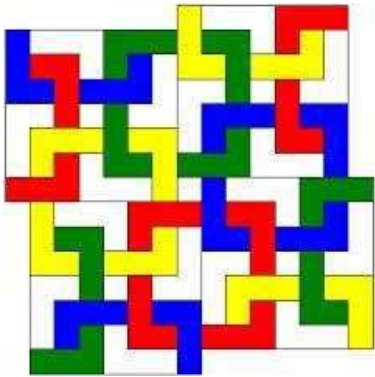
c



d

a. (*) b. c. d.

26. How many complete square Polygons are there in the given image?



a) 6

b) 8

c) 9 *

d) 11

27. Which of the following is completely true for the given traditional graphic image?



- a) Repetition*
- b) Mirror image
- c) Symmetry
- d) Dynamic

28. The image depicts a column Structure belonging to_____.



- a) Roman architecture *
- b) Chinese architecture
- c) Egyptian Architecture
- d) None of the above

29. The given architectural feature belongs to which of the following:



- a) Mosque
- b) Church
- c) Jain Temple
- d) Gurudwara*


30. Which of the following is not an essential feature of Islamic Architecture?

- a) Minaret
- b) Pictures*
- c) Calligraphy
- d) Dome

31. An area created by a closed line is

- a) Value
- b) Texture
- c) Space
- d) Shape*

32. Which layer is in the front?



- a) Red
- b) Blue
- c) White
- d) Red and White*

33. Which country does this jewelry belong to?



- a) Egypt
- b) Africa*
- c) China
- d) India

34. Which of the following best suits the image of furniture?



- a) Rhythm
- b) Movement
- c) Asymmetry*
- d) Smooth

35. _____ is an origin of line.

- a) Shape
- b) Texture
- c) Dot*
- d) Color

36. Polygon has _____ sides.

- a) Four
- b) More Than Three*
- c) Less Than Three
- d) Twelve

37. Two lines equidistance from each other means they are _____.

- a) Similar
- b) Long
- c) Short
- d) Parallel*

38. A tetrahedron has _____ faces

- a) Three
- b) Four*
- c) Five
- d) Six

39. Contours help us to understand the _____ of the object.

- a) Color
- b) Outline*
- c) Boldness
- d) Thinness

40. Vertical lines means _____.

- a) Intensity
- b) Flexibility
- c) Stability*
- d) Mobility

41. How many kinds of different polygons do this JALI (Net) has?



- a) One
- b) Two*
- c) Three
- d) Four

42. A crash bar is also known as_____.



- a) Pull handle
- b) Lift handle
- c) Push handle*
- d) None of the above

43. What is this architectural element called?



- a) Skylight*
- b) Roof window
- c) Roof glass
- d) Roof cutout

44. Which structure in India has this predominant element shown in the image?



- a) Forts in Rajasthan
- b) Temples in Orissa
- c) Temples in Tamil Nadu*
- d) Temples in Punjab

45. Where can you possibly locate the given article?



- a) Goa
- b) Fatehpur Sikri*
- c) Kochi
- d) Bhuvaneshwar

46. Revolving Doors have benefit as it_____.
- a) keeps out cold air and helps to drive down heating costs
 - b) soundproofs the lobby of a building
 - c) eliminates the slamming of doors
 - d) All of above*

47. What does 'HBO' stand for?
- a) High Bandwidth Output
 - b) Hollywood Bollywood Organization
 - c) Hollywood Broadcasting Office
 - d) Home Box Office*

48. Identify the logo in the given picture.




- a) The X Files
 - b) AXN*
 - c) Extreme Sports
 - d) Express Courier
49. Who is the creator of Graphic Novel '300'?
- a) Zack Snyder
 - b) Frank Miller*
 - c) Oliver Jeffers
 - d) Jim Lee

50. Identify the logo in the given picture.



- a) Volkswagen
- b) National Golf Club
- c) Bajaj Motorcycles*
- d) Hockey

51. Identify the logo in the given picture.



- a) Data Corporation
- b) Chanel
- c) Dolce & Gabbana
- d) DC Comics*

52. In the animated film How to Train Your Dragon, the protagonist is a_____.

- a) Viking*
- b) Athlete
- c) Prince
- d) Warrior

53. Identify the logo in the given picture.



- a) WeChat
- b) Hike Messenger
- c) Vine
- d) WhatsApp*

54. What is the next letter in this sequence J F M A M J __?

- a) P
- b) S
- c) J*
- d) T


55. A Hue is_____.

- a) A pure colour*
- b) A colour with added white
- c) A colour with added grey
- d) A bottled colour

56. Analogous colour of Blue Violet is_____.

- a) Yellow
- b) Yellow Orange
- c) Orange
- d) Red*

57. Which direction is the Indian bus traveling?



- a) To the right*
- b) To the left
- c) Both the above is true
- d) None of the above is true

58. The painting technique to create textures by applying thick is called as_____.

- a) Impasto*
- b) Textural Painting
- c) Heavy colouring
- d) Rough Colouring

59. Cast Shadow is on the_____.

- a) Opposite side of the light*
- b) Nearby the light
- c) On the object's surface
- d) None of the above

60. What is more accurate? Blue, Violet and Green are_____.

- a) Natural Colours
- b) Soothing colours
- c) Cool Colours*
- d) Fresh Colours

61. What is not a Hue from the following_____.
- a) Pista*
 - b) Purple
 - c) Blue Green
 - d) Green
62. Analogous of Red-Orange Hue is_____.
- a) Blue
 - b) Green
 - c) Violet
 - d) None of the above*
63. Due to the property of 'Saturation' the colours may appear_____.
- a) Solid
 - b) Heavy
 - c) Bright or Dull*
 - d) Meaningful
64. Poster Colours are considered to be_____medium.
- a) Opaque*
 - b) Bottled
 - c) Vibrant
 - d) None of the above
65. The movie series Lord of The Rings is based on the works by_____.
- a) Homer
 - b) Tolkien*
 - c) Plato
 - d) Kalidas

66. Which company logo is this?



- a) Himalaya
- b) Patanjali
- c) Ayurvedeeya Arkashala
- d) Dabur*

67. What does this astronomical symbol mean for?



- a) Earth*
- b) Neptune
- c) Venus
- d) Mars

68. What is this arranged instrument?



- a) Arrangement of bowls
- b) Jaltarang*
- c) Music & water
- d) None of the above

69. Following picture is the signage of_____.



- a) School ahead
- b) Runaway
- c) Run behind
- d) Exit*

70. The following silhouettes are inspired from which technique?



- a) Kirigami
- b) Origami*
- c) Quilling
- d) None of the above

71. Identify the car from the silhouette.



- a) Mini Cooper*
- b) Maruti 800
- c) Santro
- d) Maruti Swift

72. The following form of martial art belongs to which South Indian state?



- a) Karnataka
- b) Andhra Pradesh
- c) Kerala*
- d) Tamil Nadu

73. The chair of following silhouette is most suitable for...



- a) Office
- b) Bedroom
- c) Bar
- d) Poolside*

74. Which of the following is not correctly matched?

- a) Bhangra-Punjab
- b) Bihu-Nagaland*
- c) Garba-Gujarat
- d) Tamasha-Maharashtra