

SSPAD | Sample Paper 4

1. When all elements are in agreement, a design is considered.....

- a) Unified*
- b) Loyal
- c) Sincere
- d) Identified

2. Which visual design principle is mainly reflected in the image below?



- a) Simplicity
- b) Proportion
- c) Rhythm
- d) Unity*

3. What is the photographer trying to depict in the picture below?



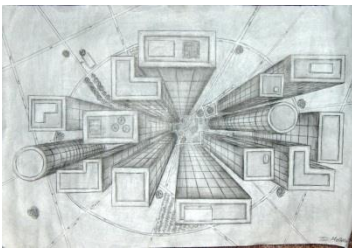
- a) Beauty
- b) Vastness of sky
- c) Proportion*
- d) Architecture

4. The view below is called as.....



- a) Eye level view
- b) Below eyelevel view
- c) Low view
- d) Bird view*

5. The image below most aptly refers to.....



- a) Geometry
- b) Architecture
- c) Interior
- d) Perspective*

6. Theories of Visual Perception developed by German psychologists in the 1920s refer to.....

- a) Gravitation
- b) Perfection
- c) Gestalt*
- d) Motion

7. The viewer's eye will naturally follow a line or curve. Then it is.....

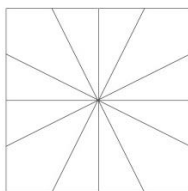
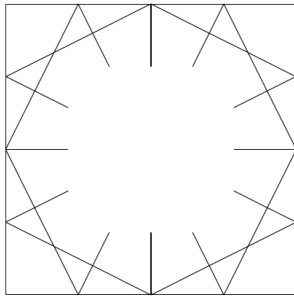
- a) Following
- b) Chain

- c) Flow
 - d) Continuation*
8. Perspective is connected with the sense of
- a) Vision
 - b) Space
 - c) Elements
 - d) Distance*
9. All Objects that have mass, take up.....
- a) Space*
 - b) Visual
 - c) Dimension
 - d) None
10. is the lack of weight or substance.
- a) Mass
 - b) Void*
 - c) Space
 - d) Illustration
11. What is Achromatic Harmony?
- a) Neutrals such as a combination of Black & White*
 - b) Neutrals such as a combination of Red & Blue
 - c) Neutrals such as a combination of Orange & Yellow
 - d) Neutrals such as a combination of Purple & Green
12. Attention is drawn to the different elements in this composition because it breaks the pattern to

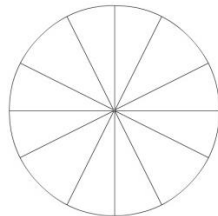


- a) Closure
- b) Similarity*
- c) Group
- d) Continuation

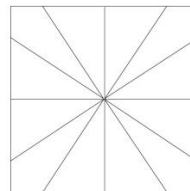
13. Select a suitable image from the four options given that will fit in the image below.



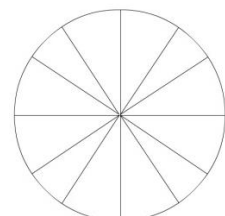
a)*



b)



c)




d)

14. The object in the picture below, under the cloth (Towel) looks like a chair because



- a) Cloth is in the shape of chair
- b) There are always four chairs around the table
- c) There are three other chairs around*
- d) It's not a chair

15. We can see one and half window in the picture. How many windows are there in real?




- a) Three*
- b) One and half
- c) Two
- d) Four

16. Which of the following shapes are required to create the word 'Hello' as shown in the picture?




- a)
- b)*
- c)
- d)

17. How many Bicycles are there in the picture below?



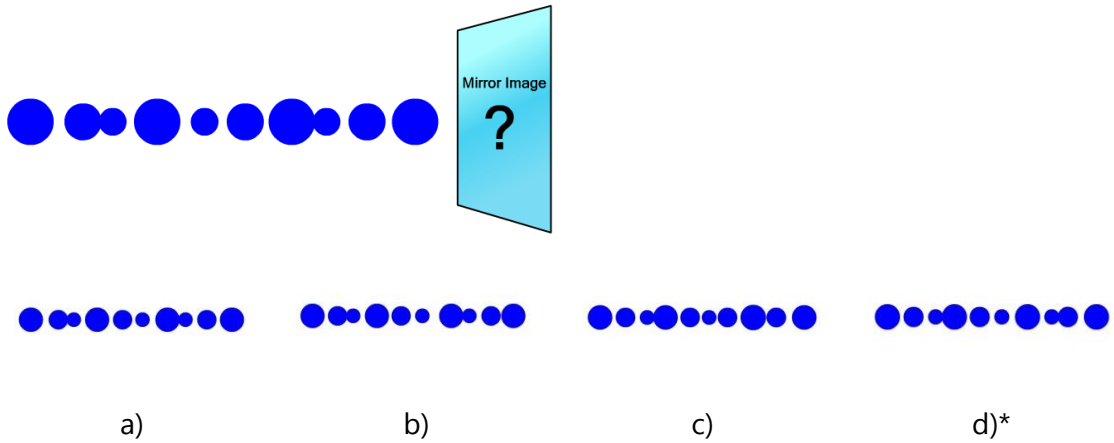
- a) 7*
- b) 8
- c) 5
- d) 9

18. Identify the animal hidden in the image below.



- a) Dog
- b) Cat
- c) Zebra
- d) Horse*

19. Find the mirror image of the line of dots given below.



20. How many elements are there in the picture below?




- a) One hand and One pot
- b) Two hands and one pot*
- c) Two hands and two pots
- d) One hand and two pots

21. What does the 'g' in the image below stand for?



- a) Guitar
- b) Girl
- c) Giraffe*
- d) Growth

22. Which is the suitable expression among the following for showing happiness?



- a) 2
- b) 1*
- c) 3
- d) 4

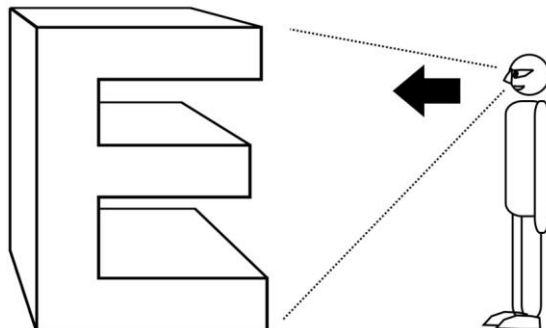
23. The three lion symbol used by Government of India is the inspiration from

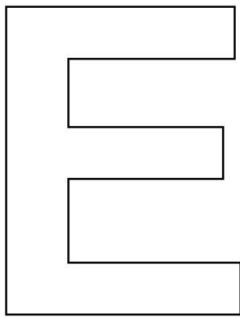
- a) Ajantha cave
- b) Sarnath*
- c) Lion king movie
- d) Indus valley coins

24. Which is the vignette colour shade used on ICICI Bank display board.

- a) Deep orange to light orange*
- b) Red to yellow
- c) Blue to pink
- d) Magenta to light magenta

25. When the letter "E" in 3D given below is viewed from the direction indicated, which is the appropriate image seen by the observer out of the four options given below?







a



b



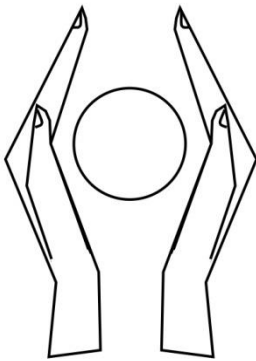
c



d

c*

26. Select a suitable 'caption' for the below given image out of the options given.



- a) Save water
- b) Save power
- c) Donate blood
- d) Save earth*

27. Select one suitable 'Type' (Font) for the title Aishwarya Jewellers out of the options given below.

a. *Abcdefghijklmn*

c. Abcdefghijklmn

b. **Abcdefghijklmn**

d. **Abcdefghijklmn**

a.*

28. Which of the following is true for the form of chair shown here.



- a) Symmetrical
- b) Abstract*
- c) Repetition
- d) Rugged

29. Arrangement of leaves in the coconut tree is



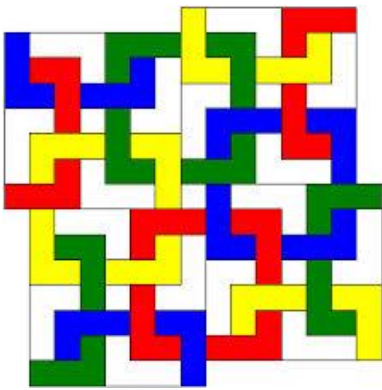
- a) Dynamic
- b) Radial*
- c) Symmetrical
- d) Vertical

30. Which one of the following options is true for the given image?




- a) Bold
- b) Soft
- c) Rhythm*
- d) Balance

31. How many complete square Polygons are there in the given image?




- a) 6
- b) 8
- c) 9*
- d) 11

32. Which layer is in the front?



- a) Red
- b) Blue
- c) White
- d) Red, White*

33. What is the nearest ratio of black (B) and light (L) in the image?



- a) 40 %(B), 60%(L)*
- b) 10 %(B), 90%(L)
- c) 20 %(B), 80%(L)
- d) 30 %(B), 70%(L)

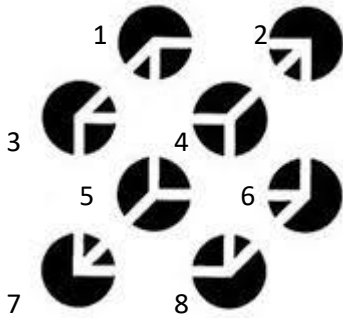
34. The Jali work in the image shown is an example of



- a) Rajput Architecture


- b) Mughal Architecture*
- c) Roman Architecture
- d) Greek Architecture

35. Which four circles appears to be in the front?



- a) 1, 2, 3, 4
- b) 5, 6, 7, 8
- c) 3, 4, 7, 8*
- d) 1, 3, 5, 7

36. How many spikes are the farthest from a viewer?








- a) 1*
- b) 2
- c) 3
- d) 4

37. Which one of the following statements is false?



- a) Woman is wearing a necklace
 - b) Woman has black hair
 - c) Woman's ear is visible
 - d) Woman's neck is not visible*
38. Random white dots put on a plane black surface is close to an interpretation of
- a) Positive
 - b) Negative
 - c) Pattern
 - d) Sky*
39. Thin and thick lines vertically aligned forms a
- a) Square
 - b) Parallelogram
 - c) Barcode*
 - d) Rectangle
40. An extended dot is a
- a) Shape
 - b) Texture
 - c) Form
 - d) Line*
41. An outline of an element is called.....
- a) Boundary
 - b) Limit

- c) Contour*
 - d) Edge
42. An extrusion of a shape adds..... to its original form.
- a) Length
 - b) Height
 - c) Dimension*
 - d) Corners
43. has a tactile sensation.
- a) Canvas
 - b) Space
 - c) Texture*
 - d) Brown
44. Addition of white to a color makes..... of it.
- a) Tint*
 - b) Tone
 - c) Pigment
 - d) Shade
45. Which of the followings is the correct version of the logo of online site 'Pinterest'?
- a)  b)*  c)  d) 
46. What does following symbol mean in the World Wide Web?



- a) Link
- b) Attachment
- c) Download
- d) Share*

47. Which is the most famous comic book character created by Bob Kane?

- a) Superman
- b) Tarzan
- c) Batman*
- d) Wolverine

48. The animated film 'The Lord of the Rings' (1978) was created by.....

- a) Ralph Bakshi*
- b) Walt Disney
- c) Hanna Barbara
- d) Dreamworks Animation

49. Following in the image is.....



- a) Odometer
- b) Speedometer
- c) Tachometer*
- d) Timer

50. Identify the logo:



- a) Good Homes
 - b) Nestle*
 - c) Cadbury
 - d) Dr. Salim Ali Foundation
51. The Primary colours called as 'Primary' because.....
- a) Most of colours can be mixed by mixing these colours*
 - b) These colours are comparatively cheap in price
 - c) They are available in the largest quantity in nature
 - d) All of the above
52. What is not a Hue from the followings.....
- a) Red
 - b) Purple
 - c) Mango*
 - d) Green
53. Analogous colours are.....
- a) Three or more Hues which are positioned next to each other on the Color Wheel*
 - b) Hues which lie opposite to each other on the colour wheel

- c) Hues that do not have any common colour
 - d) Hues which are grey
54. Which of the following is the property of Perspective.....
- a) Distortion*
 - b) Warm Colours
 - c) Shade & Light
 - d) Shape
55. Gradation can be used to create.....
- a) Flat Colours
 - b) Dark Colours
 - c) Skin Colours
 - d) Depth*
56. Distant mountains appear little bluer due to.....
- a) Earth Colour
 - b) Illusion
 - c) Atmospheric Perspective*
 - d) Rivers
57. Highlight is created where the rays of light are.....
- a) parallel to the object's surface
 - b) too intense
 - c) golden
 - d) perpendicular to the object's surface*
58. What is more accurate: Everything in this world is visible due to.....
- a) Light*
 - b) Shade
 - c) Eyes
 - d) Sense

59. What is this medical pictogram depicting?



- a) Urology
- b) Neurology
- c) Respiratory*
- d) Cardiology

60. What is this astronomical symbol depicting?



- a) Pluto
- b) Uranus
- c) Earth
- d) Jupiter*

61. Which of the animals listed below is considered the universal representation of peace.

- a) Dove*
- b) Cuckoo
- c) Peacock
- d) Hummingbird

62. Which of these might be an example of symbolism in a story?

- a) A girl eating ice cream
- b) A tree representing new life*
- c) A box being opened at Christmas
- d) Trees whispering in the wind

63. Using an object to represent an idea, means.....

- a) Symbolism*
- b) Metaphor
- c) Simile
- d) Allusion

64. The Conch is emblem of which Indian state?

- a) Karnataka
- b) Tamilnadu
- c) Orissa
- d) Kerala*

65. Following image is a symbol for depicting.....



- a) Confusion*
- b) Ideas
- c) Directions
- d) All of the above

66. Select the correct sequence of these  four Colors used for offset printing.

- a) BPYB
- b) CMYB
- c) CRYB
- d) CMYK*

67. The following picture is the hood ornament of which luxury car brand?



- a) Range Rover
- b) Rolls Royce*
- c) Bentley
- d) Austin

68. Following picture is the part of which sculpture?



- a) Priest king*
- b) Priest queen
- c) Priest master
- d) None of the above

69. Which Indian musical instrument is this?



- a) Sitar*
- b) Sarod
- c) Veena
- d) Sarangi

70. The following artist is a.....



- a) Puppeteer
- b) Mime artist*
- c) Circus artist
- d) None of the above

71. What could the following mudra mean?



- a) Snake
- b) Butterfly
- c) Eagle*
- d) Fish

72. This dress is traditionally worn by women of which country?



- a) Hungary*
- b) Portugal
- c) Spain

d) Brazil

73. This distinct motif seen commonly in Indian textiles derives its name 'Paisley' from a small town found in which country?



- a) India
- b) Scotland, UK*
- c) Persia
- d) Iran

74. This distinctive mud art known as 'Lippan' is practiced in which state of India?



- a) Rajasthan
- b) Haryana
- c) Uttar Pradesh
- d) Gujarat*

75. The Coromandel Coast in South-East India is home to which painted textile?



- a) Patachitra
- b) Kalamkari*
- c) Gond painting
- d) Soara