
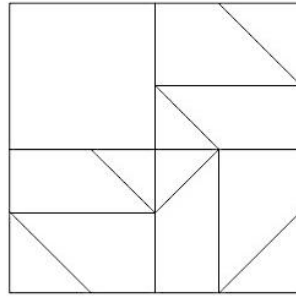



**SSPAD** | Sample Paper 1

1. \_\_\_\_\_ is the movement or natural eye flow caused by the regular reoccurrence of the related element.
  - a) Rhythm\*
  - b) Shape
  - c) Unity
  - d) Perspective
  
2. The relationship of size between objects and the space the object occupies is\_\_\_\_\_.
  - a) Balance
  - b) Perspective
  - c) Proportion\*
  - d) Space
  
3. \_\_\_\_\_ is the range of visible wavelengths from red through the spectrum to violet, perceivable by the eye and the brain.
  - a) Distance
  - b) Perspective
  - c) Color\*
  - d) Size
  
4. Brightness or dullness of a Hue is called as\_\_\_\_\_.
  - a) Intensity\*
  - b) Tints
  - c) Shades
  - d) Density

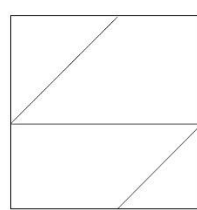
5. Select a suitable figure from the following options that will fit in the picture below?



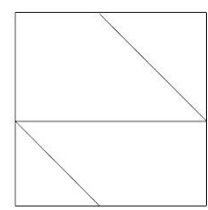
a)\*



b)



c)



d)


6. The visible and tactile surface of a substance or material is known as \_\_\_\_\_.

- a) Texture\*
- b) Smooth
- c) Rough
- d) Spiky

7. The equilibrium of the elements of design is \_\_\_\_\_.

- a) Action
- b) Color
- c) Balance\*
- d) Distance

8. Select a suitable figure from the following options that will fit in the picture below?



a)



b)



c)



d)\*


9. \_\_\_\_\_ governs the eye movement in design.

- a) Body
- b) Eyelids
- c) Flow
- d) Rhythm\*

10. Texture involves three senses \_\_\_\_\_.

- a) Smell, Touch, Taste
- b) Touch, Sight, Sound\*
- c) Sound, Smell, Taste
- d) Sight, Smell, Sound

11. How many animals are there in the picture below?



- a) 6\*                      b) 4                      c) 8                      d) 7

12. A \_\_\_\_\_ is a simple designed figure, which is usually representative of a particular period of design, style or culture.

- a) Design
- b) Shape
- c) Motif\*
- d) Texture

13. Find the mirror image of the picture given below.





a)



b)\*



c)



d)

14. When objects look similar to one another, people often perceive them as?

- a) Balanced
- b) Harmony
- c) Group or Pattern\*
- d) Closure

15. Simplicity and logical sequence promotes \_\_\_\_\_.

- a) Awareness
- b) Cleanliness
- c) Neatness
- d) Clarity\*

16. Emphasis given to an element of design adds \_\_\_\_\_ to the element.





- a) Grace
- b) Greatness
- c) Dominance\*
- d) Border

17. We have a glimpse of four sides of the roof. How many sides are there in real?




- a) 4
- b) 6
- c) 7
- d) 8\*

18. Find the correct contour line for the image given below from the options given.



19. How many triangles are there in the picture?



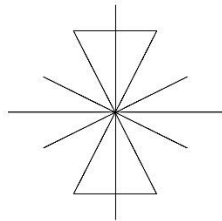
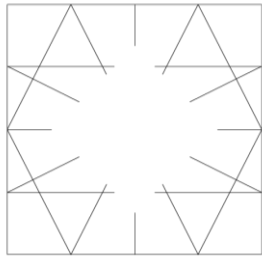
- a) 3
- b) 5\*
- c) 4
- d) 6

20. In the visual given below on the far right the figure becomes a Focal Point because it is \_\_\_\_\_ to the other.

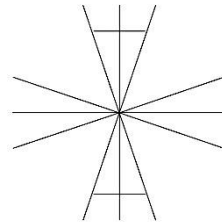


- a) Dissimilar\*
- b) Closure
- c) Rhythm
- d) Asymmetrical balance

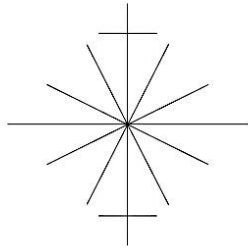
21. Select the suitable figure from the following options that will fit in the below given picture?



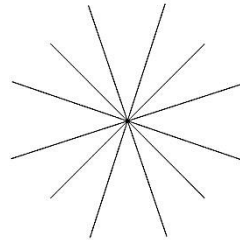
a)



b)



c) \*



d)

22. What does the two 'O's depict?

**L O O K**

- a) Nose
- b) Ears
- c) Eyes\*
- d) Bicycle



23. How many birds are there in the picture?



- a) 12                      b) 13                      c) 11\*                      d) 10

24. Select the most suitable Typeface for printing "Happy Birthday" on a greeting card for age group 8 – 12 years.

a. **A**bcd**e**fg**h**ij**k**lm**n**

c. Abcdefghijklmn

b. *A*bc*d*ef*g*h*i*jk*l*m*n*

d. **A****B****C****D****E****F****G****H****I****J****K****L****M****N**

- a. (\*)    b.    c.    d

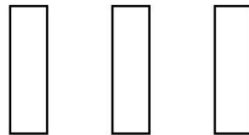
25. What is the image seen if a person views the 3-Dimensional letter "W" from top view?




Letter "W" in 3 dimensional form.



a



b



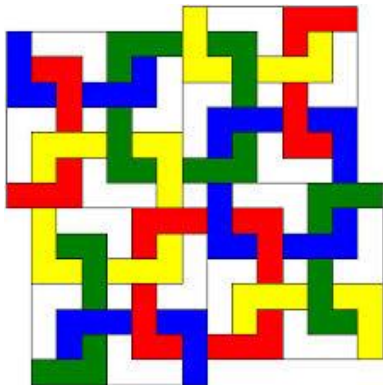
c



d

a. (\*) b. c. d.

26. How many complete square Polygons are there in the given image?



- a) 6
- b) 8
- c) 9\*
- d) 11

27. Which of the following is completely true for the given traditional graphic image?



- a) Repetition\*
- b) Mirror image
- c) Symmetry
- d) Dynamic

28. The image depicts a column Structure belonging to \_\_\_\_\_.



- a) Roman architecture \*
- b) Chinese architecture
- c) Egyptian Architecture
- d) None of the above

29. The given architectural feature belongs to which of the following:



- a) Mosque
- b) Church
- c) Jain Temple
- d) Gurudwara\*


30. Which of the following is not an essential feature of Islamic Architecture?

- a) Minaret
- b) Pictures\*
- c) Calligraphy
- d) Dome

31. An area created by a closed line is .....

- a) Value
- b) Texture
- c) Space
- d) Shape\*

32. Which layer is in the front?



- a) Red
- b) Blue
- c) White
- d) Red and White\*

33. Which country does this jewelry belong to?



- a) Egypt
- b) Africa\*
- c) China
- d) India

34. Which of the following best suits the image of furniture?



- a) Rhythm
- b) Movement
- c) Asymmetry\*
- d) Smooth

35. \_\_\_\_\_ is an origin of line.

- a) Shape
- b) Texture
- c) Dot\*
- d) Color

36. Polygon has \_\_\_\_\_ sides.

- a) Four
- b) More Than Three\*
- c) Less Than Three
- d) Twelve

37. Two lines equidistance from each other means they are \_\_\_\_\_.

- a) Similar
- b) Long
- c) Short
- d) Parallel\*

38. A tetrahedron has \_\_\_\_\_ faces
- a) Three
  - b) Four\*
  - c) Five
  - d) Six
39. Contours help us to understand the \_\_\_\_\_ of the object.
- a) Color
  - b) Outline\*
  - c) Boldness
  - d) Thinness

40. Vertical lines means \_\_\_\_\_.
- a) Intensity
  - b) Flexibility
  - c) Stability\*
  - d) Mobility

41. How many kinds of different polygons do this JALI (Net) has?



- a) One
- b) Two\*
- c) Three
- d) Four

42. A crash bar is also known as \_\_\_\_\_.



- a) Pull handle
- b) Lift handle
- c) Push handle\*
- d) None of the above

43. What is this architectural element called?



- a) Skylight\*
- b) Roof window
- c) Roof glass
- d) Roof cutout



44. Which structure in India has this predominant element shown in the image?



- a) Forts in Rajasthan
- b) Temples in Orissa
- c) Temples in Tamil Nadu\*
- d) Temples in Punjab

45. Where can you possibly locate the given article?



- a) Goa
- b) Fatehpur Sikri\*
- c) Kochi
- d) Bhuvaneshwar

46. Revolving Doors have benefit as it \_\_\_\_\_.
- a) keeps out cold air and helps to drive down heating costs
  - b) soundproofs the lobby of a building
  - c) eliminates the slamming of doors
  - d) All of above\*

47. What does 'HBO' stand for?
- a) High Bandwidth Output
  - b) Hollywood Bollywood Organization
  - c) Hollywood Broadcasting Office
  - d) Home Box Office\*

48. Identify the logo in the given picture.




- a) The X Files
  - b) AXN\*
  - c) Extreme Sports
  - d) Express Courier
49. Who is the creator of Graphic Novel '300'?
- a) Zack Snyder
  - b) Frank Miller\*
  - c) Oliver Jeffers
  - d) Jim Lee

50. Identify the logo in the given picture.



- a) Volkswagen
- b) National Golf Club
- c) Bajaj Motorcycles\*
- d) Hockey

51. Identify the logo in the given picture.



- a) Data Corporation
- b) Chanel
- c) Dolce & Gabbana
- d) DC Comics\*

52. In the animated film How to Train Your Dragon, the protagonist is a \_\_\_\_\_.

- a) Viking\*
- b) Athlete
- c) Prince
- d) Warrior

53. Identify the logo in the given picture.



- a) WeChat
- b) Hike Messenger
- c) Vine
- d) WhatsApp\*

54. What is the next letter in this sequence J F M A M J \_\_?

- a) P
- b) S
- c) J\*
- d) T


55. A Hue is \_\_\_\_\_.

- a) A pure colour\*
- b) A colour with added white
- c) A colour with added grey
- d) A bottled colour

56. Analogous colour of Blue Violet is \_\_\_\_\_.

- a) Yellow
- b) Yellow Orange
- c) Orange
- d) Red\*

57. Which direction is the Indian bus traveling?



- a) To the right\*
- b) To the left
- c) Both the above is true
- d) None of the above is true

58. The painting technique to create textures by applying thick is called as \_\_\_\_\_.

- a) Impasto\*
- b) Textural Painting
- c) Heavy colouring
- d) Rough Colouring

59. Cast Shadow is on the \_\_\_\_\_.

- a) Opposite side of the light\*
- b) Nearby the light
- c) On the object's surface
- d) None of the above

60. What is more accurate? Blue, Violet and Green are \_\_\_\_\_.

- a) Natural Colours
- b) Soothing colours
- c) Cool Colours\*
- d) Fresh Colours

61. What is not a Hue from the following \_\_\_\_\_.
- a) Pista\*
  - b) Purple
  - c) Blue Green
  - d) Green
62. Analogous of Red-Orange Hue is \_\_\_\_\_.
- a) Blue
  - b) Green
  - c) Violet
  - d) None of the above\*
63. Due to the property of 'Saturation' the colours may appear\_\_\_\_\_.
- a) Solid
  - b) Heavy
  - c) Bright or Dull\*
  - d) Meaningful
64. Poster Colours are considered to be \_\_\_\_\_ medium.
- a) Opaque\*
  - b) Bottled
  - c) Vibrant
  - d) None of the above
65. The movie series Lord of The Rings is based on the works by \_\_\_\_\_.
- a) Homer
  - b) Tolkien\*
  - c) Plato
  - d) Kalidas

66. Which company logo is this?



- a) Himalaya
- b) Patanjali
- c) Ayurvedeeya Arkashala
- d) Dabur\*

67. What does this astronomical symbol mean for?



- a) Earth\*
- b) Neptune
- c) Venus
- d) Mars

68. What is this arranged instrument?



- a) Arrangement of bowls
- b) Jaltarang\*
- c) Music & water
- d) None of the above

69. Following picture is the signage of \_\_\_\_\_.



- a) School ahead
- b) Runaway
- c) Run behind
- d) Exit\*

70. The following silhouettes are inspired from which technique?



- a) Kirigami
- b) Origami\*
- c) Quilling
- d) None of the above

71. Identify the car from the silhouette.



- a) Mini Cooper\*
- b) Maruti 800
- c) Santro
- d) Maruti Swift



72. The following form of martial art belongs to which South Indian state?



- a) Karnataka
- b) Andhra Pradesh
- c) Kerala\*
- d) Tamil Nadu

73. The chair of following silhouette is most suitable for...



- a) Office
- b) Bedroom
- c) Bar
- d) Poolside\*

74. Which of the following is not correctly matched?

- a) Bhangra-Punjab
- b) Bihu-Nagaland\*
- c) Garba-Gujarat
- d) Tamasha-Maharashtra